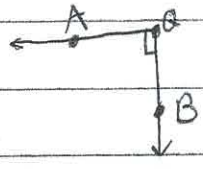
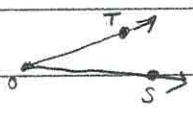


✓ 19



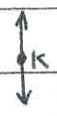
$\angle AQB$ is a right angle.

~~✓ 20~~
21



$\angle TOS$ is an acute angle.

✓ 23



$\angle K$ is a straight angle

✓ 25

(a)

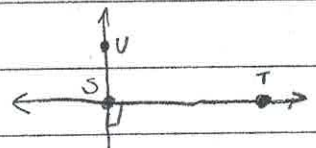
in the sentence: The road was so slippery that my car did a 360. it means that the car turned in a complete circle

(b)

in the sentence: After the election, the governor's view on taxes took a 180° turn.; it means that the governor's view turned in the exact opposite direction.

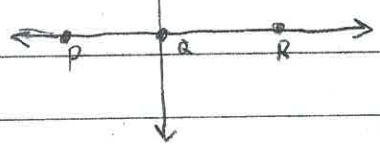
✓ 27

true: \vec{UQ} is perpendicular to \vec{ST}



✓ 29

The measure of $\angle USQ$ is less than the measure of $\angle PQR$ is a



False statement; the correct statement

is: The measurement of $\angle USQ$ is the same as the measurement of $\angle PQR$

Ran out of Time ✓
spent \approx 1hr